

Q1.

A transverse sinusoidal wave travelling on a string is given by:  $y(x,t) = 0.150 \sin(15.7x - 50.3t)$  (SI units). At a certain instant, point **A** is at the origin, and point **B** is the closest point to **A** along the  $x$  axis where the motion is  $60.0^\circ$  out of phase with the motion at **A**. What is the distance between points **A** and **B**?

- A) 0.0667 m
- B) 0.133 m
- C) 0.267 m
- D) 6.28 m
- E) 3.14 m

Q2.

Two identical sound sources emit sound waves of wavelength  $\lambda$  and are separated by a distance  $d$ . What is the lowest non-zero value of  $d$  for which constructive interference occurs everywhere along the line that passes through the two sources? Consider only points which do not lie between the two sources.

- A)  $\lambda$
- B)  $\lambda/4$
- C)  $2\lambda$
- D)  $\lambda/2$
- E)  $4\lambda$

Q3.

A 200-g ice cube at  $0.0^\circ\text{C}$  is dropped into 350 g of water at  $20^\circ\text{C}$ . What is the temperature of the mixture when it reaches thermal equilibrium?

- A)  $0.0^\circ\text{C}$
- B)  $-13^\circ\text{C}$
- C)  $+24^\circ\text{C}$
- D)  $-24^\circ\text{C}$
- E)  $+13^\circ\text{C}$

Q4.

An ideal monatomic gas undergoes an isobaric process at a pressure of 80 kPa from an initial volume of 20 L to a final volume of 50 L. What is the change in the internal energy of the gas?

- A) 3.6 kJ
- B) 2.4 kJ
- C) 4.0 kJ
- D) 7.0 kJ
- E) zero

Q5.

Four moles of an ideal monatomic gas undergo a free expansion to twice the initial volume. What is the change in the entropy of the gas in the process?

- A) 23 J/K
- B) 29 J/K
- C) 35 J/K
- D) 17 J/K
- E) 0

Q6.

An electron and a proton are fixed. The direction of the electric field halfway between the electron and the proton

- A) is toward the electron
- B) is toward the proton
- C) cannot be determined because the field is zero
- D) depends on the distance between the two particles
- E) is perpendicular to the line joining the two particles

Q7.

A conducting spherical shell has an outer radius of 0.75 m and a net charge of zero. A point charge  $q$  is placed at the center of the shell. The electric field just outside its surface is 992 N/C pointing radially toward the center of the sphere. What is the charge on the inner surface of the shell?

- A) +62 nC
- B) -62 nC
- C) +31 nC
- D) -31 nC
- E) zero

Q8.

In a certain region of space, a uniform electric field is in the positive  $x$  direction. A particle with negative charge is moved from  $x = 20$  cm to  $x = 60$  cm. Which of the following statements is **CORRECT**?

- A) The potential energy of the charge increases.
- B) The potential energy of the charge decreases.
- C) The potential energy of the charge remains the same.
- D) The particle moves to a region of higher electric potential.
- E) The particle moves to a point of the same electric potential.

Q9.

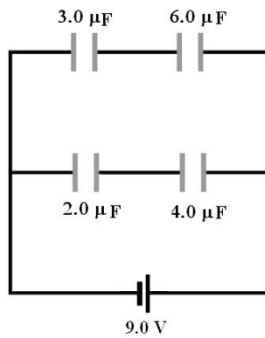
Two electrons are initially far away from each other. They are projected toward each other, with each having a speed of  $1.0 \times 10^3$  m/s. At what separation between the electrons will they momentarily stop?

- A) 0.25 mm
- B) 1.3 cm
- C) 0.32 mm
- D) 1.8 cm
- E) 0.65 cm

Q10.

For the combination of capacitors shown in **FIGURE 1**, what is the potential difference across the 4.0- $\mu$ F capacitor?

Fig#



- A) 3.0 V
- B) 6.0 V
- C) 7.5 V
- D) 9.0 V
- E) 4.5 V

Q11.

A 5.00-mV voltage is applied to a copper rod, initially at 20.0 °C, resulting in a current  $I_0$ . When the rod is heated to a temperature  $T_x$ , the current is reduced to  $I_0/3$ . If the temperature coefficient of resistivity of copper is  $\alpha = 4.10 \times 10^{-3} \text{ K}^{-1}$ , what is the temperature ( $T_x$ ) of the rod? Assume that the dimensions of the rod do not change.

- A) 508 °C
- B) 488 °C
- C) 60.0 °C
- D) 6.70 °C
- E) 20.0 °C

Q12.

A copper (Cu) rod and an aluminum (Al) rod of the same length and different cross sectional areas are connected in series as shown in **FIGURE 2**. The resistivities and cross sectional areas are:  $\rho_{\text{Cu}} = 1.69 \times 10^{-8} \text{ } \Omega \cdot \text{m}$ ,  $\rho_{\text{Al}} = 2.75 \times 10^{-8} \text{ } \Omega \cdot \text{m}$ ,  $A_{\text{Al}} = 0.400 \text{ cm}^2$ ,  $A_{\text{Cu}} = 0.200 \text{ cm}^2$ . The ratio of the magnitude of the electric field along the aluminum rod to that along the copper rod ( $E_{\text{Al}}/E_{\text{Cu}}$ ) is

Fig#



- A) 0.814
- B) 3.25
- C) 1.23
- D) 1.00
- E) 2.00

Q13.

A 6.00-V ideal battery is used to power a device whose resistance is 200  $\Omega$ . If the battery can move a charge of 240 C, how long will it last?

- A) 2.22 hours
- B) 0.556 hours
- C) 35.6 hours

- D) 8.89 hours  
E) 11.8 hours

Q14.

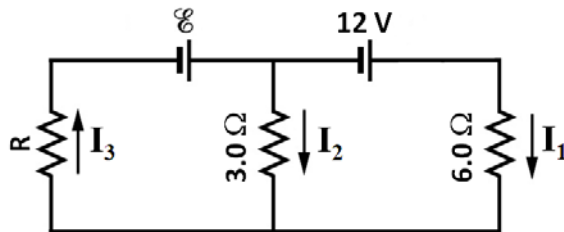
A 0.20-A current flows across a metallic rod of length 1.0 m when connected to a 1.0-V battery. The rod is then cut into four identical pieces each having a length of 0.25 m, which are then connected in parallel to the same 1.0-V battery. The new current delivered by the battery is

- A) 3.2 A  
B) 0.40 A  
C) 0.80 A  
D) 0.050 A  
E) 0.72 A

Q15.

In the circuit of **FIGURE 3**, the current  $I_1 = 3.0$  A. What is the value of current  $I_3$ ?

Fig#

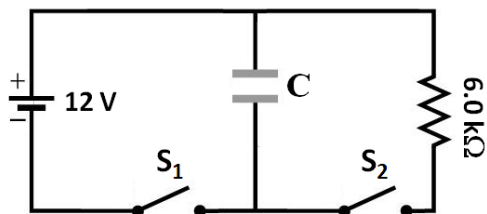


- A) 5.0 A  
B) 1.0 A  
C) 13 A  
D) 7.0 A  
E) 6.0 A

Q16.

A capacitor of capacitance  $C$  is connected to a 12-V battery, as shown in **FIGURE 4**. First, switch  $S_2$  was open, and switch  $S_1$  was closed until the capacitor is fully charged. Then,  $S_1$  is open and  $S_2$  is closed. If the voltage across the capacitor decays and reaches 6.0 V after 0.10 s, the capacitance  $C$  is equal to

Fig#

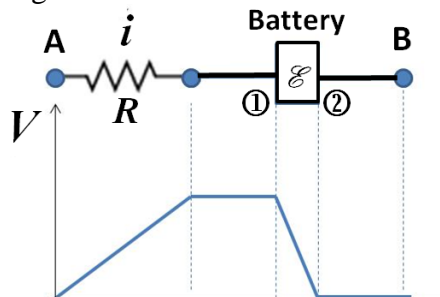


- A) 24  $\mu$ F  
B) 11  $\mu$ F  
C) 14  $\mu$ F  
D) 140  $\mu$ F  
E) 47  $\mu$ F

Q17.

FIGURE 5 shows a portion of an electric circuit that includes a battery connected in series to a resistor of resistance  $R$ . Considering the variation of the electric potential along the circuit shown in the figure, which one of the following statements is **CORRECT**?

Fig#



- A) The current in  $R$  flows to the left and the positive terminal of the battery is at point 1.
- B) The current in  $R$  flows to the left and the positive terminal of the battery is at point 2.
- C) The current in  $R$  flows to the right and the positive terminal of the battery is at point 1.
- D) The current in  $R$  flows to the right and the positive terminal of the battery is at point 2.
- E) The current is zero.

Q18.

A positive charge  $q$  is moving with velocity  $\vec{v}$  in a uniform external magnetic field  $\vec{B}$ . The charge  $q$  experiences maximum magnetic force if

- A) The direction of  $\vec{v}$  is perpendicular to the direction of  $\vec{B}$ .
- B) The direction of  $\vec{v}$  is the same as the direction of  $\vec{B}$ .
- C) The direction of  $\vec{v}$  is opposite to the direction of  $\vec{B}$ .
- D) The direction of  $\vec{v}$  makes an angle of  $45^\circ$  with the direction of  $\vec{B}$ .
- E) The direction of  $\vec{v}$  makes an angle of  $135^\circ$  with the direction of  $\vec{B}$ .

Q19.

A proton travels through both a uniform magnetic field  $\vec{B}$  and a uniform electric field  $\vec{E}$ . The magnetic field is given by  $\vec{B} = 2.5\hat{i}$  (mT). At one instant, the velocity of the proton is  $\vec{v} = 2.0 \times 10^3 \hat{j}$  (m/s) and the **net force** acting on it is zero. Find the electric field  $\vec{E}$  in units of V/m. Ignore the gravitational force on the proton.

- A)  $+5.0\hat{k}$
- B)  $-5.0\hat{k}$
- C)  $+5.0\hat{j}$
- D)  $-5.0\hat{j}$
- E)  $-5.0\hat{k} + 5.0\hat{j}$

Q20.

An electron of speed  $2.0 \times 10^7$  m/s circles in a plane perpendicular to a uniform magnetic field. The radius of the orbit is 25 cm. The magnitude of the magnetic field is

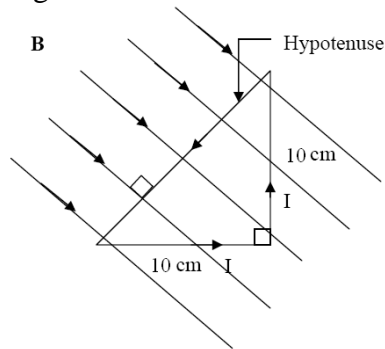
- A)  $4.6 \times 10^{-4}$  T

- B)  $1.6 \times 10^{-6}$  T
- C)  $6.3 \times 10^{-6}$  T
- D)  $2.0 \times 10^{-5}$  T
- E)  $3.2 \times 10^{-4}$  T

Q21.

A 100-turn coil, in the shape of a right triangle, has two equal sides. A current of 3.0 A passes through the coil. A uniform external magnetic field of magnitude 1.0 T is perpendicular to the hypotenuse of the coil, as shown in **FIGURE 6**. Find the magnitude of the total magnetic force on the coil.

Fig#

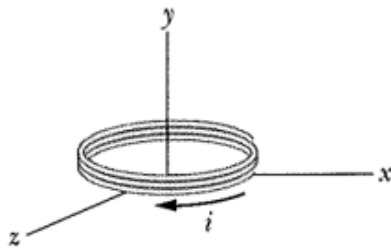


- A) zero
- B) 30 N
- C) 0.30 N
- D) 0.60 N
- E) 60 N

Q22.

The coil in **FIGURE 7** has its plane parallel to the  $xz$  plane, and carries current  $i = 1.0$  A in the direction indicated. The coil has 8.0 turns and a cross sectional area of  $4.0 \times 10^{-3}$  m<sup>2</sup>, and lies in an external uniform magnetic field that is given by  $\vec{\mathbf{B}} = -2.0\hat{\mathbf{i}}$  (mT). Find the torque (in units of  $\mu\text{N}\cdot\text{m}$ ) on the coil due to the magnetic field  $\vec{\mathbf{B}}$ .

Fig#

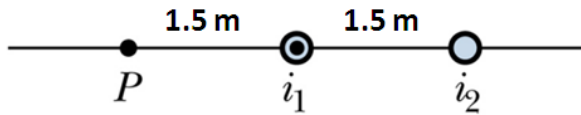


- A)  $-64\hat{\mathbf{k}}$
- B)  $+64\hat{\mathbf{k}}$
- C)  $+12\hat{\mathbf{i}}$
- D)  $-12\hat{\mathbf{i}}$
- E)  $-64\hat{\mathbf{j}}$

Q23.

**FIGURE 8** shows cross sections of two long straight wires. The left hand wire carries current  $i_1 = 5.0$  A, directed out of the page. In order to produce a zero net magnetic field at point P, what should be the current  $i_2$ ?

Fig#

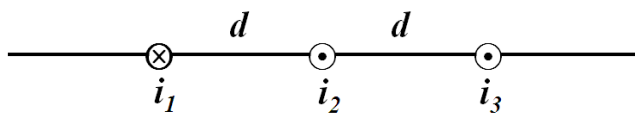


- A) 10 A, into the page
- B) 10 A, out of the page
- C) 2.5 A, into the page
- D) 2.5 A, out of the page
- E) 5.0 A into the page

Q24.

Three long parallel wires are arranged as shown in **FIGURE 9**, where  $d = 50$  cm. The current into the page is  $i_1 = 3.0$  A. The currents out of the page are  $i_2 = 0.25$  A and  $i_3 = 4.0$  A. What is the magnitude of the net force per unit length acting on the wire carrying current  $i_2$  due to the currents in the other wires?

Fig#



- A)  $7.0 \times 10^{-7}$  N/m
- B)  $1.0 \times 10^{-7}$  N/m
- C)  $1.8 \times 10^{-7}$  N/m
- D)  $1.0 \times 10^{-6}$  N/m
- E)  $2.4 \times 10^{-7}$  N/m

Q25.

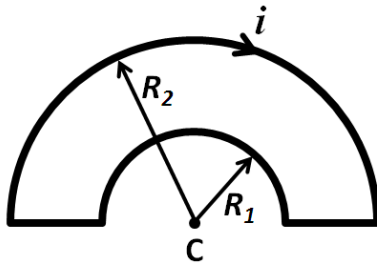
A long straight wire carrying a 3.0-A current enters a room through a window 2.0 m high and 1.5 m wide. The absolute value of the path integral  $\oint \vec{B} \cdot d\vec{s}$  around the window frame is

- A)  $3.8 \times 10^{-6}$  T.m
- B)  $2.5 \times 10^{-7}$  T.m
- C)  $3.0 \times 10^{-7}$  T.m
- D)  $2.0 \times 10^{-7}$  T.m
- E)  $1.6 \times 10^{-5}$  T.m

Q26.

A current is set up in a wire loop that is formed as shown in **FIGURE 10**, where  $R_1 = 2.0$  cm and  $R_2 = 4.0$  cm. The loop carries a current of 5.0 A, as shown in the figure. What is the magnetic field at the center of the loop (C)?

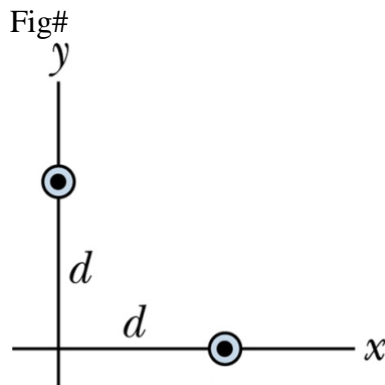
Fig#



- A)  $3.9 \times 10^{-5}$  T out of the page
- B)  $3.9 \times 10^{-5}$  T into the page
- C)  $1.2 \times 10^{-4}$  T out of the page
- D)  $1.2 \times 10^{-4}$  T into the page
- E)  $7.9 \times 10^{-5}$  T into of the page

Q27.

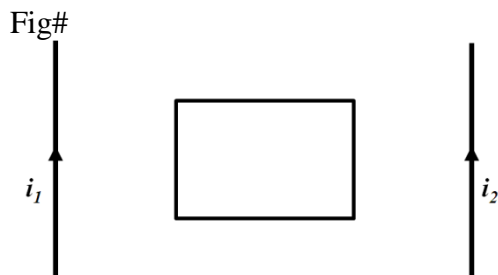
Two long wires are placed in the  $xy$  plane, as shown in **FIGURE 11**. Each wire carries a current of 1.5 A, directed out of the page. If the distance  $d = 3.0$  m, what is the net magnetic field due to these wires at the origin?



- A)  $(+0.10 \hat{i} - 0.10 \hat{j})$  ( $\mu\text{T}$ )
- B)  $(+0.10 \hat{i} + 0.10 \hat{j})$  ( $\mu\text{T}$ )
- C)  $(-0.10 \hat{i} - 0.10 \hat{j})$  ( $\mu\text{T}$ )
- D)  $(-0.10 \hat{i} + 0.10 \hat{j})$  ( $\mu\text{T}$ )
- E) zero

Q28.

A conducting rectangular loop of wire is placed midway between two long straight parallel wires as shown in **FIGURE 12**. The wires carry currents  $i_1$  and  $i_2$ , as indicated. If  $i_1$  is increasing and  $i_2$  is constant, then the induced current in the loop



- A) is counterclockwise
- B) is zero
- C) is clockwise



- D) depends on the value of  $i_1 - i_2$
- E) depends on the value of  $i_1 + i_2$

Q29.

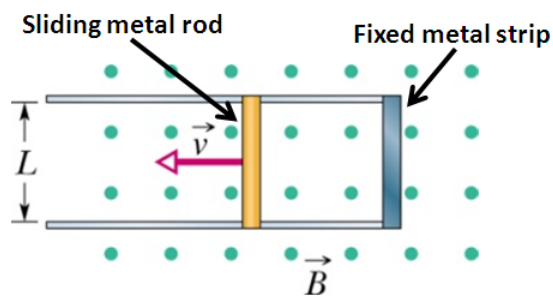
A 10.0-m long copper wire, with a resistance of  $5.00 \Omega$ , is formed into a square loop and placed with its plane perpendicular to an external uniform magnetic field that is increasing at the constant rate of  $10.0 \text{ mT/s}$ , at what rate is thermal energy generated in the loop?

- A) 0.780 mW
- B) 3.20 mW
- C) 4.35 mW
- D) 2.50 mW
- E) 2.10 mW

Q30.

In **FIGURE 13**, a metal rod, of resistance  $15 \Omega$ , is forced to move with constant velocity along two parallel metal rails, connected with a metal strip at one end. The rod moves in a uniform magnetic field of magnitude  $0.50 \text{ T}$  that points directly out of the page. If the rails are separated by  $L = 25 \text{ cm}$ , and the speed of the rod is  $0.55 \text{ m/s}$ , what is the current in the rod?

Fig#



- A) 4.6 mA, up
- B) 4.6 mA, down
- C) 6.9 mA, up
- D) 6.9 mA, down
- E) 2.3 mA down

